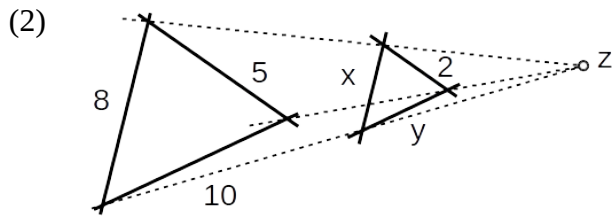


(1) Bestimme jeweils die Unbekannte x.

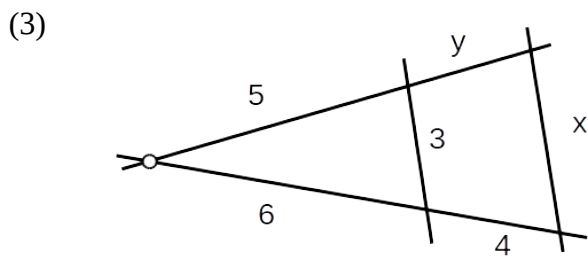
a) $\frac{13}{5} = \frac{x}{7,5}$

b) $\frac{x+1}{18} = \frac{17}{45}$

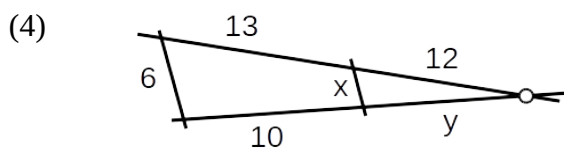
c) $\frac{x-3}{3} = \frac{x}{5}$



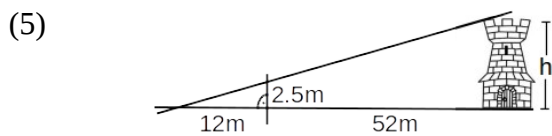
Berechne x, y:



Berechne x, y:



Berechne x, y:



Wie hoch ist der Turm?